






16.6.20 GREEN group

Record your answers in your blue book.



Draw dots to show the value of each coin.

 1 penny	 2 pence	 5 pence	 10 pence	 20 pence
--	--	--	---	---

Example:



A horizontal rectangular box containing a single red dot.



An empty horizontal rectangular box.



An empty horizontal rectangular box.



An empty horizontal rectangular box.



An empty horizontal rectangular box.