







16.6.20 BLUE group

Record your answers in your blue book.



Draw dots to show the value of each coin.

 1 penny	 2 pence	 5 pence	 10 pence	 20 pence	 50 pence
--	--	--	---	---	---

Example:







--



--



--



--



--